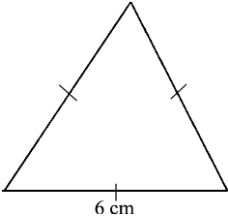
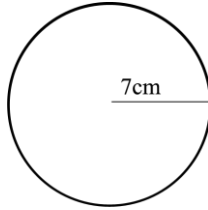


Math Tester 01

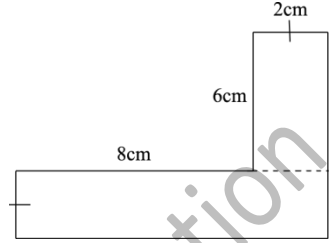
1. පහත සඳහන් තල රූප වල පරිමිතිය සොයන්න.



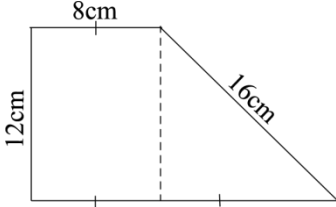
i).



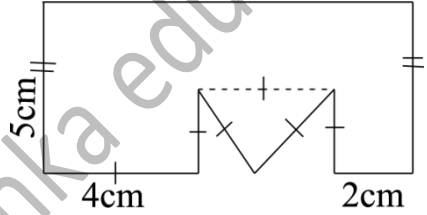
ii).



iii).

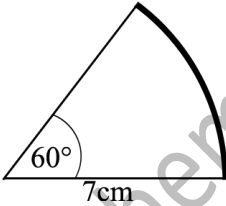


vi).

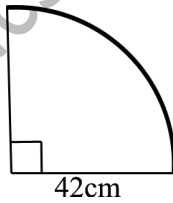


v).

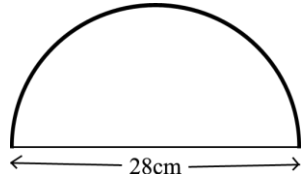
පහත දැක්වෙන එක් එක් කෝන්ද්‍රික බන්ධ වල වාප දිග සොයන්න.



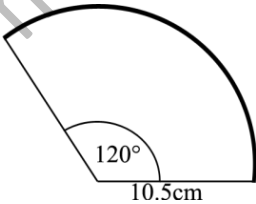
i).



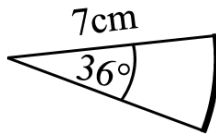
ii).



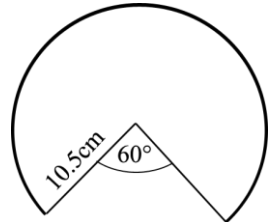
iii).



iv).

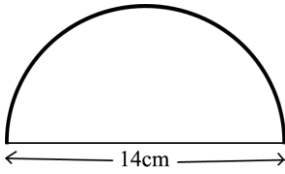


v).

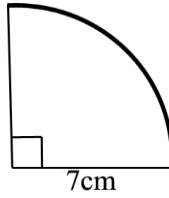


vi).

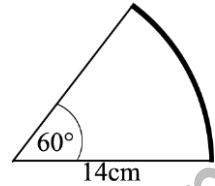
2. පහත දැක්වෙන කේන්ද්‍රික බණ්ඩ වල පරිමිතිය සොයන්න.



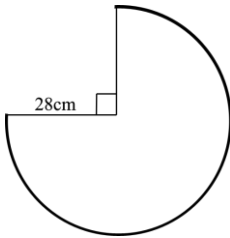
i).



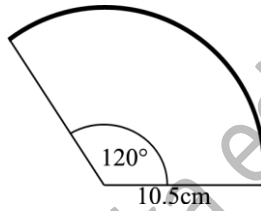
ii).



iii).



iv).



v).

3. අරය 21cm වන කේන්ද්‍රික බණ්ඩයක පරිමිතිය 64cm නම් කේන්ද්‍ර කෝණය කොපමණ ද?
4. කේන්ද්‍ර කෝණය 120° හා වාප දිග 44cm වන කේන්ද්‍රික බණ්ඩයක අරය කොපමණ ද?
5. පහත තල රූප වල අඳුරු කර ඇති කොටසේ පමණක් පරිමිතිය සොයන්න.

